

**Solve each problem.****Answers**

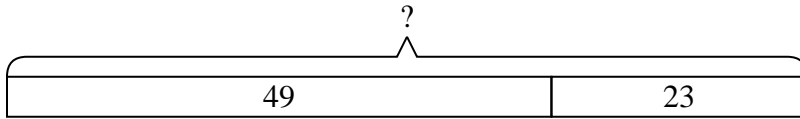
- 1) Lana had 49 sheets of paper in her desk and 23 more in her backpack. How many did she have total?
- 2) Ned collected 14 cans to recycle on Monday and 47 more on Tuesday. How many cans did Ned collect all together?
- 3) Paige received 24 text messages before noon and another 28 after noon. How many text messages did Paige receive total?
- 4) Robin had 18 DS games and her friend had 44 games. How many do they have total?
- 5) A restaurant sold 25 sodas in the morning and 42 in the afternoon. How many sodas did they sell total?
- 6) On Facebook Carol had 20 photos of her friends and 32 photos of her family. How many photos did she have total?
- 7) A clown gave away 43 balloons to girls and 45 balloons to boys. How many balloons did he give away total?

1. \_\_\_\_\_
2. \_\_\_\_\_
3. \_\_\_\_\_
4. \_\_\_\_\_
5. \_\_\_\_\_
6. \_\_\_\_\_
7. \_\_\_\_\_

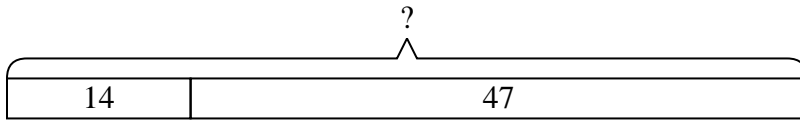


Solve each problem.

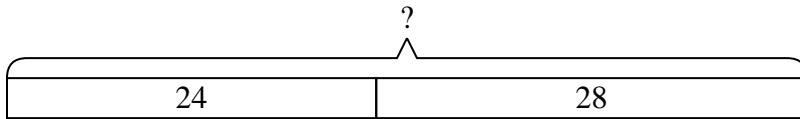
- 1) Lana had 49 sheets of paper in her desk and 23 more in her backpack. How many did she have total?



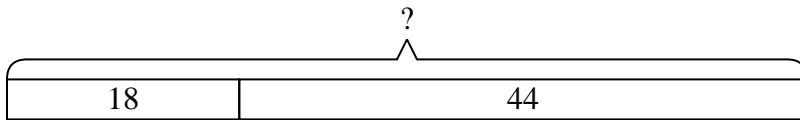
- 2) Ned collected 14 cans to recycle on Monday and 47 more on Tuesday. How many cans did Ned collect all together?



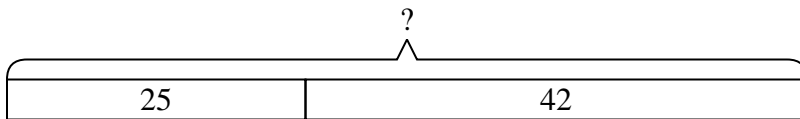
- 3) Paige received 24 text messages before noon and another 28 after noon. How many text messages did Paige receive total?



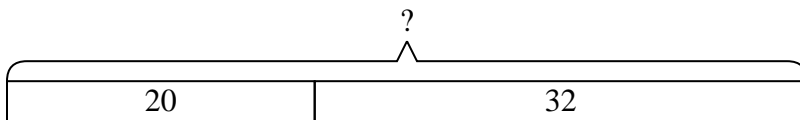
- 4) Robin had 18 DS games and her friend had 44 games. How many do they have total?



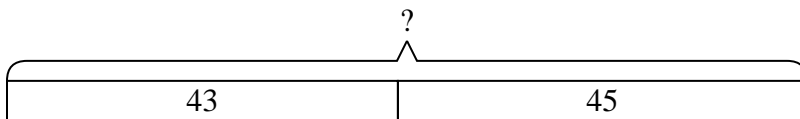
- 5) A restaurant sold 25 sodas in the morning and 42 in the afternoon. How many sodas did they sell total?



- 6) On Facebook Carol had 20 photos of her friends and 32 photos of her family. How many photos did she have total?



- 7) A clown gave away 43 balloons to girls and 45 balloons to boys. How many balloons did he give away total?

**Answers**

1. **72**  
2. **61**  
3. **52**  
4. **62**  
5. **67**  
6. **52**  
7. **88**